

KENYA EARLY YEAR EDUCATION ASSESSMENT

AUGUST HOLIDAY ACTIVITIES 2026

GRADE 1 – MATHEMATICS ACTIVITIES

Time: 1 HOUR

LEARNER'S DETAILS

Name: _____ School: _____

Admission Number: _____ Date: _____



Instructions for Learners

1. Write your name, school name, admission number and the date in the spaces provided.
2. This paper consists of 4 questions.
3. Answer all the questions in the spaces provided.

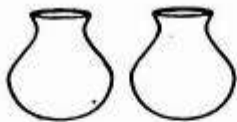
FOR EXAMINER'S USE

SECTION	% SCORE	Exceeding expectations	Meeting expectations	Approaching expectations	Below expectations	Assessors remarks
SCORE RANGE		80-100	50-79	40-49	1-39	
Level		4	3	2	1	
TICK LEVEL						

Answer ALL questions in this section

1. Match the number to their objects.

4



6



2



2. Count in 2s up to 10.

2, 4, 6, _____, _____, _____, 10.

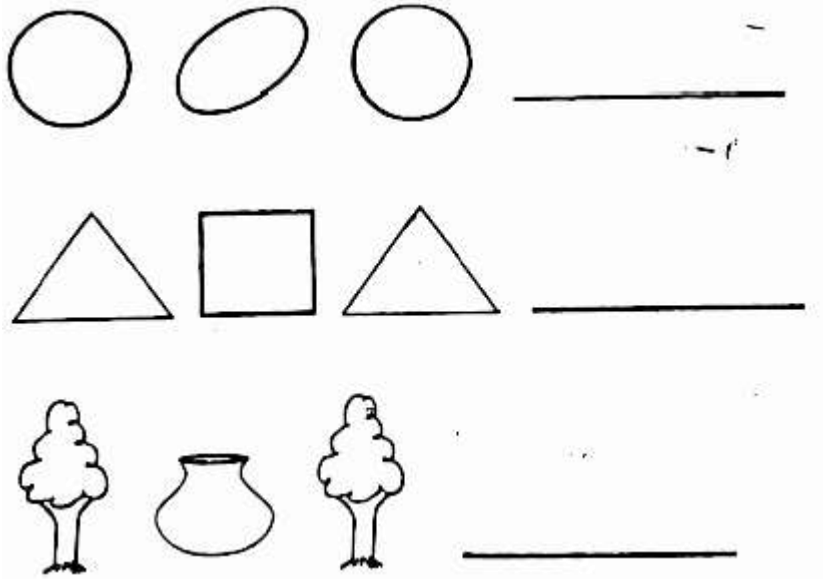
3. Count in 5s up to 25.

5, 10, _____, 20, 25.

4. Count in 10s up to 100.

30, 40, 50, _____, 70, __, 90, 100.

5. Draw the next shape in the pattern.



6. Count backwards and write the missing numbers.

a) 10, 9, 8, __, 6, 5

b) 30, 25, __, 15, 10

c) 70, 60, 50, __, 30

7. Place the numbers in their correct place value.

a) 14 = __tens __ones

b) 32 = __tens __ones

c) 09 = __tens __ones

d) 8 = __tens __ones

e) 3 = __tens __ones

8. a) 8

+1

—

b) 5

+3

$$\overline{7} + 3 = \underline{\quad}$$

d) 15

$$\underline{+3}$$

—

9. Subtract.

a) $5 - 3 = \underline{\quad}$

b) $8 - 5 = \underline{\quad}$

c) 7

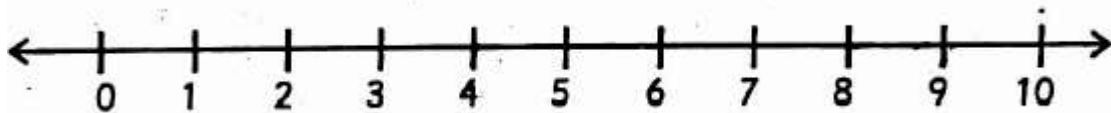
$$\underline{-2}$$

—

10. Amina has 3 bottles and Maria has 6 bottles. How many bottles do they have altogether? $\underline{\quad}$

11. Use a number line to add.

$$3 + 2 = \underline{\quad}$$



12. Add.

